


# Year 6 Transition Challenge 03

Calling all Mathematicians!

Identify the shapes depicted in the pictures below!




1



2




3




4




5




6



7



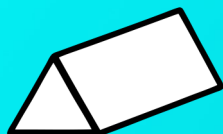
8



9




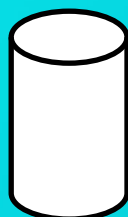
10



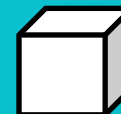
11



12



13



14



How many degrees are there in a right angle triangle?

15

Email your answers, full name and primary school to [acann@helston.cornwall.sch.uk](mailto:acann@helston.cornwall.sch.uk)

for a chance to be in the monthly prize draw.